

# Mathematics

Delprov D

ÅRSKURS


3

---

Elevens namn och klass/grupp




1. Nova and Troj take a bus to the pet shop.  
They start their journey at 09.00.  
The bus ride takes 1 hour and 20 minutes.  
What time is it when they get off the bus?



9.00

Answer: \_\_\_\_\_

2. Nova feeds the animals. She starts at 11:30  
and is done after a quarter of an hour.  
What time is it when she is done?



11.30

Answer: \_\_\_\_\_

3. Victor is in the pet shop and is first choosing some fish and then paying.  
How long might this take?  
*Circle your answer.*

10 seconds

20 minutes

10 hours

4. Sara is standing in line and there are two people ahead of her.  
How long might she have to wait?  
*Circle your answer.*

5 seconds

5 minutes


5 hours

5. Fill in the missing numbers.

One year is \_\_\_\_\_ months.

One week is \_\_\_\_\_ days.

One hour is \_\_\_\_\_ minutes.



6. a) Exactly two months ago was Nova's birthday.  
In which month is Nova's birthday?

Answer: \_\_\_\_\_

b) Troj's birthday is in exactly three months.  
In which month is Troj's birthday?

Answer: \_\_\_\_\_



1 March



9. A bag contains 3 decilitres (dl) of bird seed.

a) How many decilitres of bird seed is there in 4 bags?



Birdseed

Answer: \_\_\_\_\_

b) Approximately how many litres is that?  
*Circle your answer.*


1 litre

2 litre

4 litre

12 litre

10.



The aquarium holds 200 litres of water.  
Nova has a bucket that holds 10 litres.  
How many buckets of water does she need to add in order to fill the aquarium?  
*Show your working and write your answer.*



10 litre

Answer: \_\_\_\_\_



